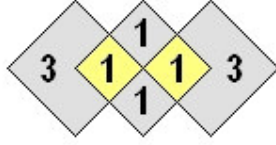
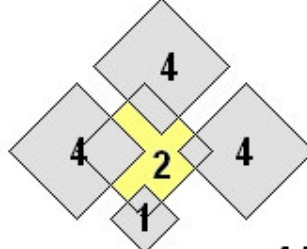




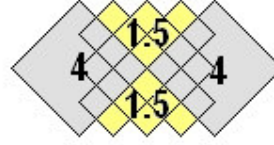
## Çözüm 5: Dörtgenler



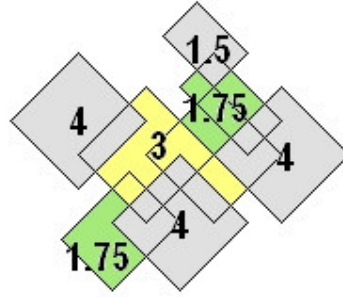
$$3+1+1+1+1+3 = 10$$



$$4+4+4+1+2 = 15$$



$$4+4+1.5+1.5 = 11$$



$$4+4+4+1.75+1.75+1.5+3 = 20$$

Üstteki 3 örneğin verilerine bakarsak, en büyük karenin bir kenarının 2 birim, en küçük karenin bir kenarının 0.5 birim kabul edildiğini görürüz. Bundan sonrası sadece alan hesaplamak.